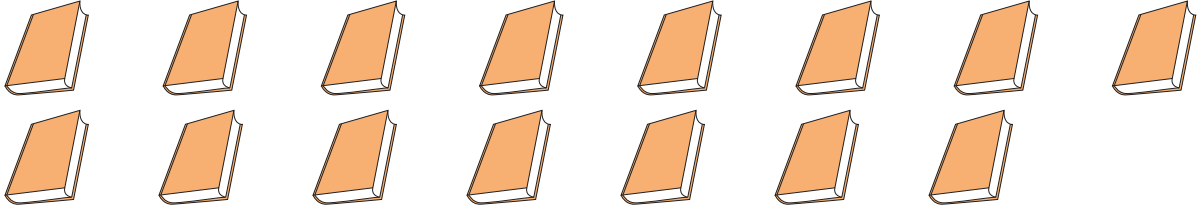


## Picture Subtraction

Fact9: S3

Cross out nine items from each set given below. How many are left?

1) 

15 - 9 = \_\_\_\_\_

2) 

11 -

**PREVIEW**

Gain complete access to the largest collection of worksheets in all subjects!


3) 

16 -


Members, please log in to download this worksheet.

Not a member? Please sign up to gain complete access.

[www.mathworksheets4kids.com](http://www.mathworksheets4kids.com)

4) 

12 - 9 = \_\_\_\_\_

5) 

14 - 9 = \_\_\_\_\_