

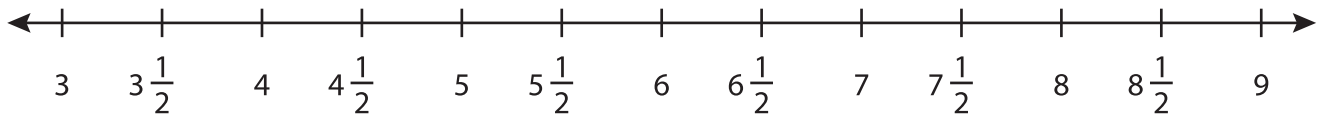
Name : \_\_\_\_\_

## Subtraction using Number Line

Mixed Review: T2S2

Indicate hops on each number line and complete the subtraction sentences.

1)  $8\frac{1}{2} - 4\frac{1}{2} =$  \_\_\_\_\_



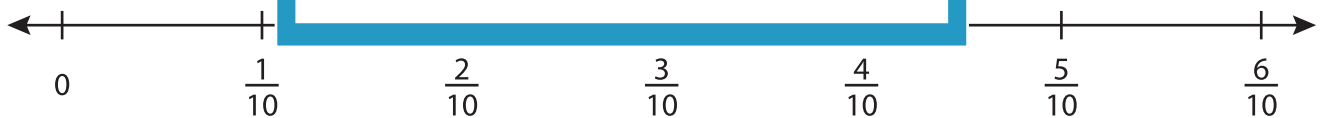
2)  $\frac{10}{13} - \frac{4}{13} =$  \_\_\_\_\_



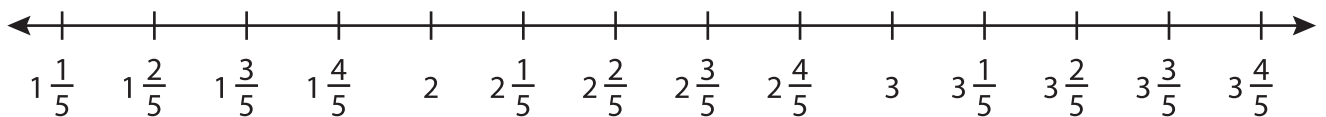
3)  $4\frac{2}{4} - \frac{3}{4} =$  \_\_\_\_\_



4)  $\frac{5}{10} - \frac{1}{10} =$  \_\_\_\_\_



5)  $3\frac{4}{5} - 2\frac{3}{5} =$  \_\_\_\_\_



# PREVIEW

Gain complete access to the largest collection of worksheets in all subjects!

Members, please log in to download this worksheet.

Not a member? Please sign up to gain complete access.

[www.mathworksheets4kids.com](http://www.mathworksheets4kids.com)