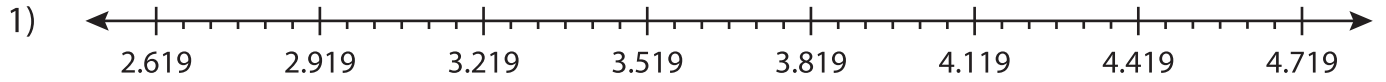


Name : _____

Decimal Addition

Thousandth: S5

Solve using number line.



a) $4.119 + 0.4 = \underline{\hspace{2cm}}$

b) $3.369 + 0.45 = \underline{\hspace{2cm}}$

c) $2.869 + 0.8 = \underline{\hspace{2cm}}$

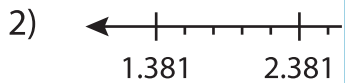
$ + 0.35 = \underline{\hspace{2cm}}$

e) $3.069 + 1.2 = \underline{\hspace{2cm}}$

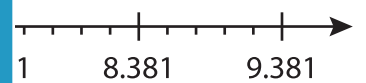
$ + 0.05 = \underline{\hspace{2cm}}$

g) $2.719 + 0.8 = \underline{\hspace{2cm}}$

$ + 0.45 = \underline{\hspace{2cm}}$



a)
$$\begin{array}{r} 1.581 \\ + 1.200 \\ \hline \end{array}$$



d)
$$\begin{array}{r} 7.581 \\ + 1.400 \\ \hline \end{array}$$

e)
$$\begin{array}{r} 3.381 \\ + 0.600 \\ \hline \end{array}$$

f)
$$\begin{array}{r} 2.181 \\ + 0.200 \\ \hline \end{array}$$

g)
$$\begin{array}{r} 0.781 \\ + 1.000 \\ \hline \end{array}$$

h)
$$\begin{array}{r} 2.381 \\ + 2.200 \\ \hline \end{array}$$

i)
$$\begin{array}{r} 5.181 \\ + 3.200 \\ \hline \end{array}$$

j)
$$\begin{array}{r} 1.381 \\ + 0.400 \\ \hline \end{array}$$

k)
$$\begin{array}{r} 8.381 \\ + 0.800 \\ \hline \end{array}$$

l)
$$\begin{array}{r} 3.581 \\ + 3.000 \\ \hline \end{array}$$

PREVIEW

Gain complete access to the largest collection of worksheets in all subjects!

Members, please log in to download this worksheet.

Not a member? Please sign up to gain complete access.

www.mathworksheets4kids.com