

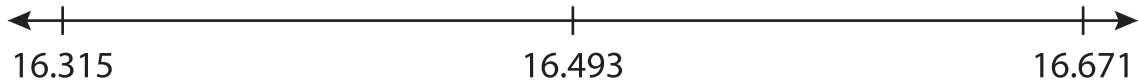
Name : _____

Number Line Addition

Hops-thousandth: S2

Indicate hops on each number line and complete the addition sentences.

1) $16.493 + 0.178 = \underline{\hspace{2cm}}$



2) $8.984 + \quad = \quad$



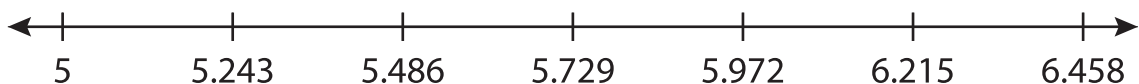
3) $4.026 + \quad = \quad$



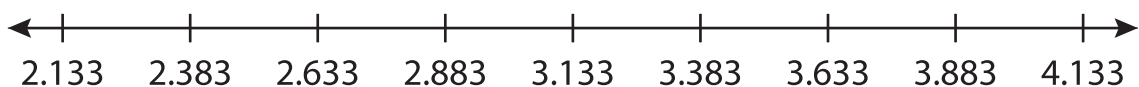
4) $1.944 + \quad = \quad$



5) $5 + \quad = \quad$



6) $2.383 + 1.75 = \underline{\hspace{2cm}}$



PREVIEW

Gain complete access to the largest collection of worksheets in all subjects!

Members, please log in to download this worksheet.

Not a member? Please sign up to gain complete access.

www.mathworksheets4kids.com