


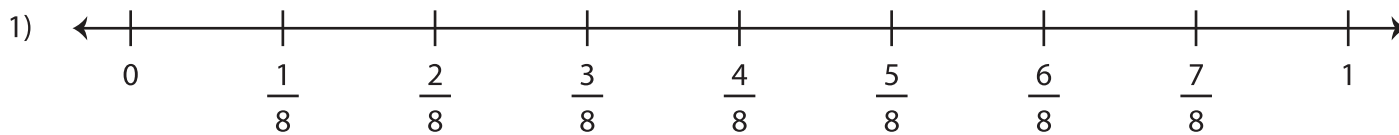


Name : \_\_\_\_\_

## Equivalent Fractions on a Number Line

Sheet 2

Label the number line with fractions. Complete each equivalent fraction sentence using the number lines.



# PREVIEW

Gain complete access to the largest  
collection of worksheets in all subjects!

Members, please  
log in to  
download this  
worksheet.

Not a member?  
Please sign up to  
gain complete  
access.

[www.mathworksheets4kids.com](http://www.mathworksheets4kids.com)

$$\frac{2}{5} = \frac{\boxed{\phantom{000}}}{10}$$